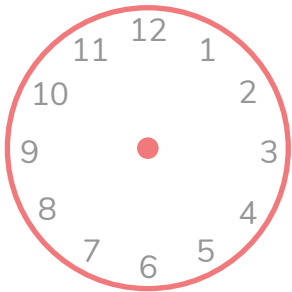


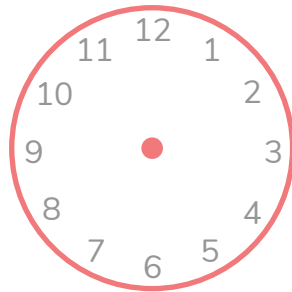
WHAT TIME IS IT?



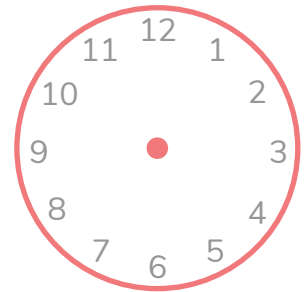
Draw the correct times on the clocks.
Remember the small hand represents the hour and the big hand represents the minutes.



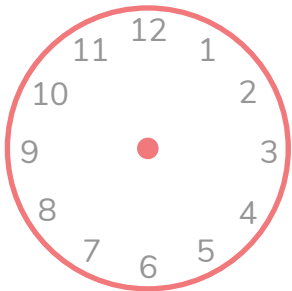
1) It's six oclock.



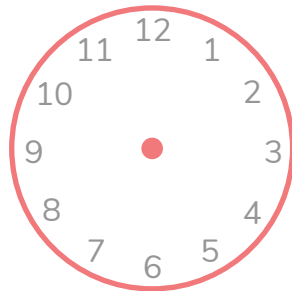
2) It's half-past twelve.



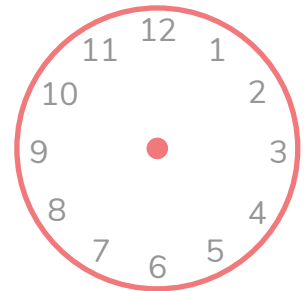
3) It's a quarter past one.



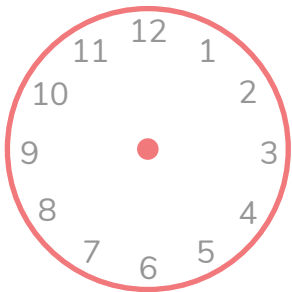
4) It's twenty past five.



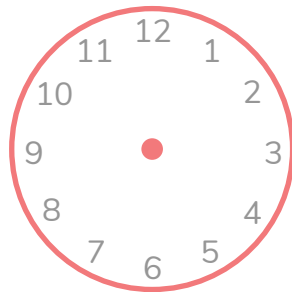
5) It's five to six.



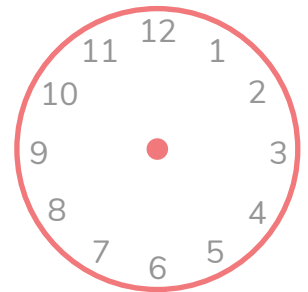
6) It's five past six.



7) It's fifteen past two.



8) It's twenty five to seven.



9) It's two to two.